


Trường mầm non Hồng Tiến


Họ và tên: .....

Lớp: .....


### Đếm vật và thực hiện phép tính?




$2 + 6 = 8$




$\underline{\quad} + \underline{\quad} = \underline{\quad}$




$\underline{\quad} + \underline{\quad} = \underline{\quad}$




$\underline{\quad} + \underline{\quad} = \underline{\quad}$




$\underline{\quad} + \underline{\quad} = \underline{\quad}$




$\underline{\quad} + \underline{\quad} = \underline{\quad}$




$\underline{\quad} + \underline{\quad} = \underline{\quad}$




$\underline{\quad} + \underline{\quad} = \underline{\quad}$




$\underline{\quad} + \underline{\quad} = \underline{\quad}$



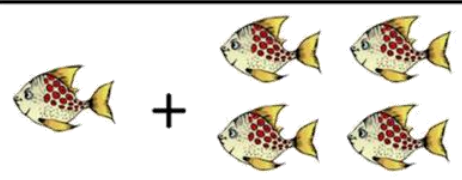
$\underline{\quad} + \underline{\quad} = \underline{\quad}$




$\underline{\quad} + \underline{\quad} = \underline{\quad}$




$\underline{\quad} + \underline{\quad} = \underline{\quad}$




$\underline{\quad} + \underline{\quad} = \underline{\quad}$



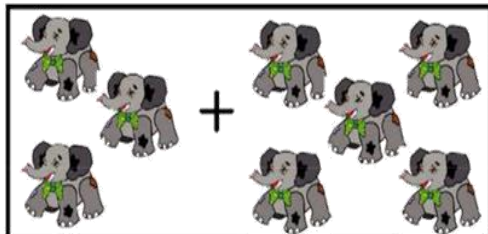
$\underline{\quad} + \underline{\quad} = \underline{\quad}$



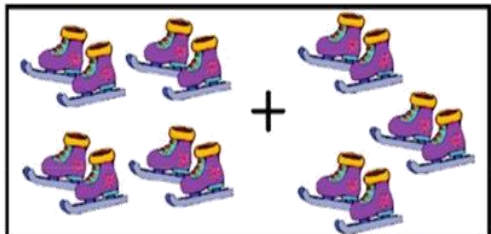
$\underline{\quad} + \underline{\quad} = \underline{\quad}$



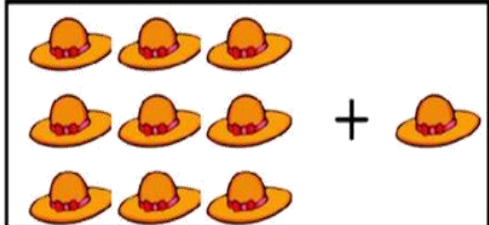
$$\underline{2} + \underline{2} = \underline{4}$$




$$\underline{\quad} + \underline{\quad} = \underline{\quad}$$




$$\underline{\quad} + \underline{\quad} = \underline{\quad}$$




$$\underline{\quad} + \underline{\quad} = \underline{\quad}$$




$$\underline{\quad} + \underline{\quad} = \underline{\quad}$$



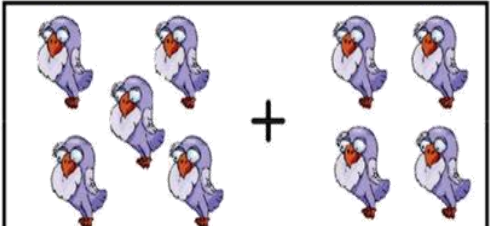
$$\underline{\quad} + \underline{\quad} = \underline{\quad}$$




$$\underline{\quad} + \underline{\quad} = \underline{\quad}$$



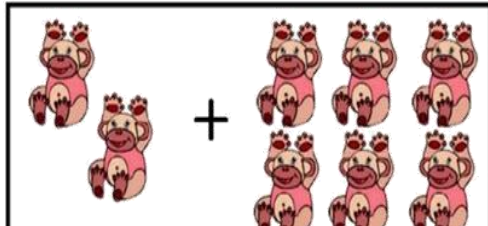
$$\underline{\quad} + \underline{\quad} = \underline{\quad}$$



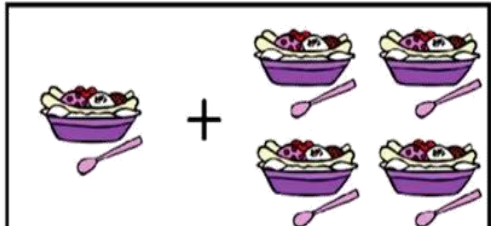
$$\underline{\quad} + \underline{\quad} = \underline{\quad}$$



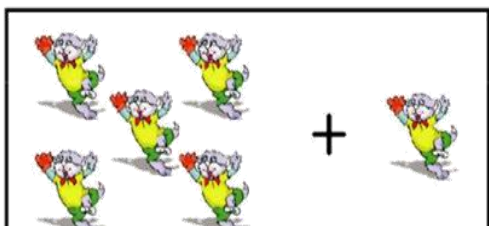
$$\underline{\quad} + \underline{\quad} = \underline{\quad}$$



$$\underline{\quad} + \underline{\quad} = \underline{\quad}$$




$$\underline{\quad} + \underline{\quad} = \underline{\quad}$$



$$\underline{\quad} + \underline{\quad} = \underline{\quad}$$





$$\underline{\quad} + \underline{\quad} = \underline{\quad}$$




$$\underline{\quad} + \underline{\quad} = \underline{\quad}$$


Đếm vật và thực hiện phép so sánh?



7



1





Tổng có : ..... chữ



a

ă

h

ă

h

l

b

a

t

s

h

a

a

h

b

c

h

h

k

t

c





Tổng có : ..... chữ



h

ă

h

ă

k

c

k

a

â

s

d

m

a

e

k

c

d

a

k

t

c



**Tìm sợi dây dẫn đến vật ?**




**A**



**B**



**C**



**Nối chấm theo dãy số thứ tự để hoàn thành bức tranh và tô màu cho thật đẹp nhé!**

