



## 1. Tính nhẩm

a)  $2 + 1 = 3$

$3 + 6 = 9$

$4 + 5 = 9$

$5 + 2 = 7$

$8 + 0 = 8$

$2 + 7 = 9$

b)  $3 - 1 = 2$

$9 - 6 = 3$

$10 - 4 = 6$

$4 - 2 = 2$

$8 - 0 = 8$

$6 - 3 = 3$

2 a) Số ?



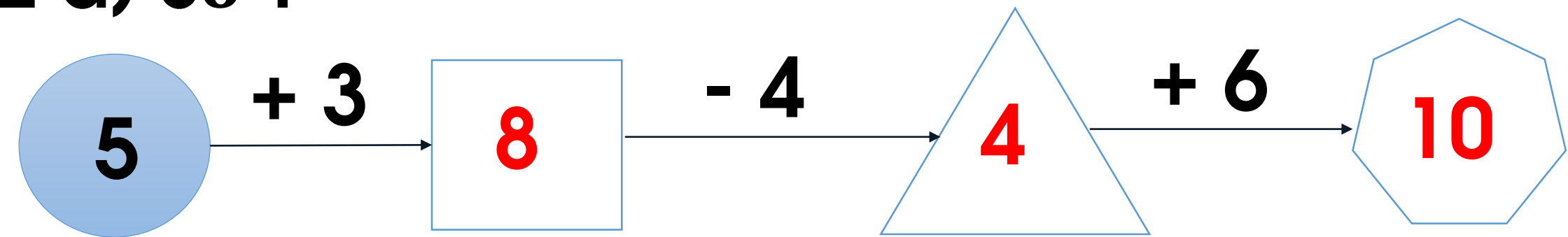
b) >; <; =

5 + 4 ? 9

3 ? 9 - 7

8 + 0 ? 9

2 a) Số ?



b) >; <; = ?

$$\begin{array}{c} 5 + 4 = 9 \\ 9 \end{array}$$

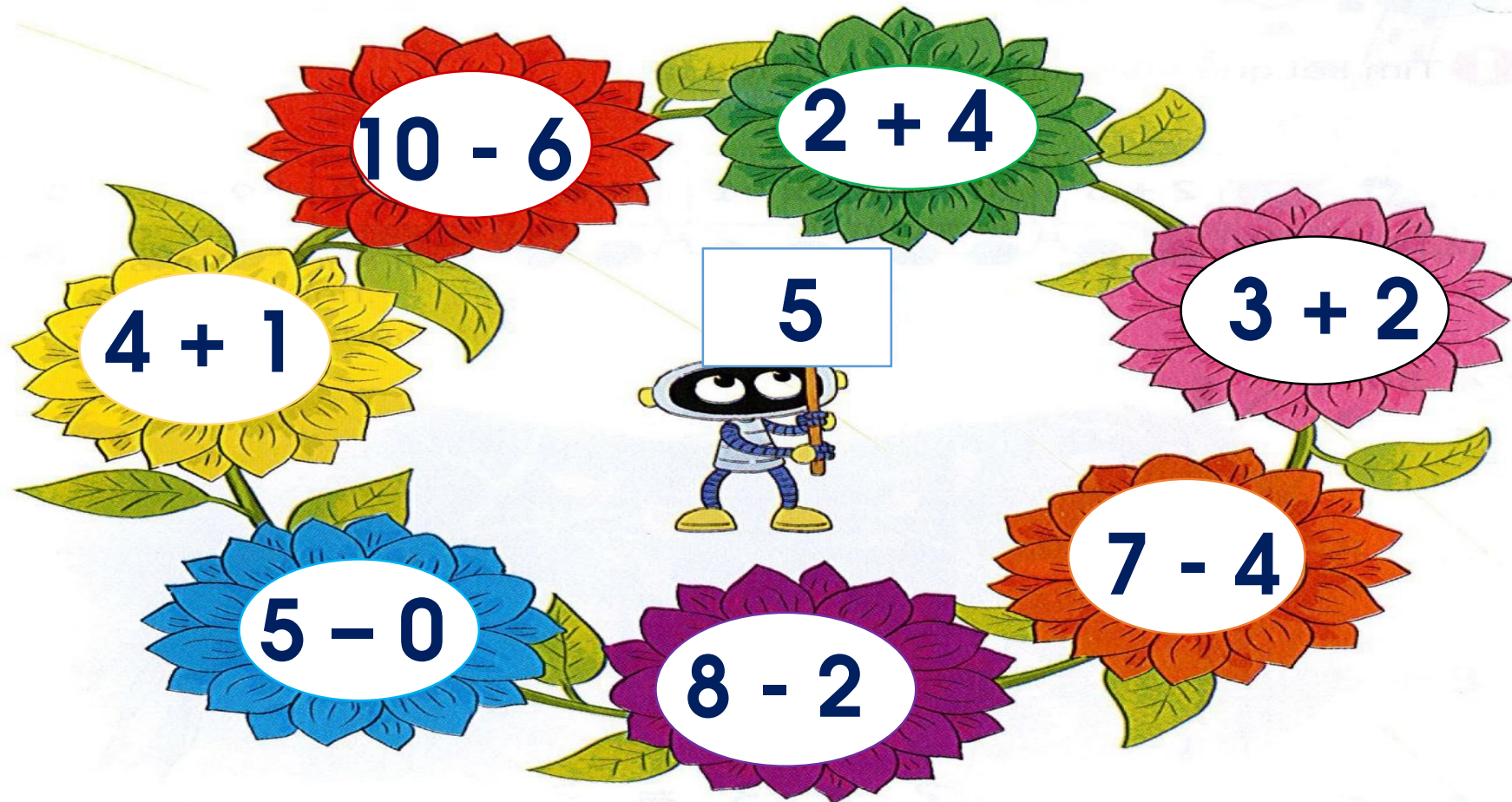
$$\begin{array}{c} 3 > 9 - 7 \\ 2 \end{array}$$


$$\begin{array}{c} 8 + 0 < 9 \\ 8 \end{array}$$





**Giaûi lao**

3. Những bông hoa nào ghi phép tính có kết quả bằng 5?





4. Töø cauc soá döôùì ñaây vaø cauc daáu +, -, = , em coù theå laäp ñöôic cauc pheùp tính ñuùng naøo?



4. Töø cauc soá döôùi ñaây vaø cauc daáu +, -, =, em cou theå laäp ñöôic cauc pheùp tính ñuùng naøo?



$$2 + 7 = 9$$

$$7 + 2 = 9$$

$$9 - 2 = 7$$

$$9 - 7 = 2$$