




Con hãy đếm gộp cả 2 đối tượng xem có tất cả số lượng là bao nhiêu và viết vào dấu gạch ngang nhé!




Name _____

Insect Addition


Solve. Add the butterflies and ladybugs.




$2 + 2 = \underline{\quad}$




$6 + 4 = \underline{\quad}$



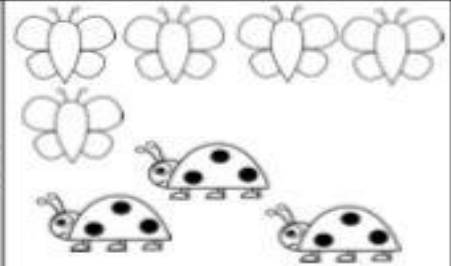
$7 + 2 = \underline{\quad}$




$3 + 3 = \underline{\quad}$



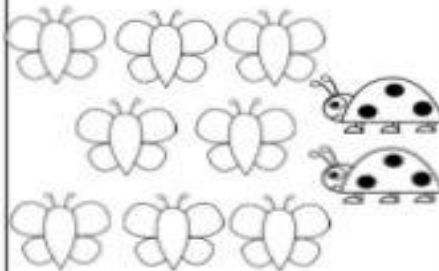
$9 + 1 = \underline{\quad}$




$5 + 3 = \underline{\quad}$



$4 + 3 = \underline{\quad}$



$8 + 2 = \underline{\quad}$



$3 + 2 = \underline{\quad}$

